




# Number Bonds of 10 Ten-Frames




$$\boxed{\phantom{0}} + \boxed{10} = \boxed{10}$$



$$\boxed{1} + \boxed{\phantom{0}} = \boxed{10}$$



$$\boxed{2} + \boxed{\phantom{0}} = \boxed{10}$$



$$\boxed{\phantom{0}} + \boxed{\phantom{0}} = \boxed{10}$$

- What do you notice?
- Can you see a pattern?
- Can you complete the ten frames by following the pattern?



$$\boxed{\phantom{0}} + \boxed{\phantom{0}} = \boxed{\phantom{0}}$$



$$\boxed{\phantom{0}} + \boxed{\phantom{0}} = \boxed{\phantom{0}}$$

# Number Bonds of 10 Ten-Frames


$$\square + \square = \square$$


$$\square + \square = \square$$


$$\square + \square = \square$$


$$\square + \square = \square$$


$$\square + \square = \square$$