

Compare numbers within 50

1 Tick the number sentences that are true.

Use cubes or counters to help you.

a) 12 is more than 13

b) 33 is less than 41 ✓

c) 2 tens and 8 ones is equal to twenty-eight ✓

d) $40 + 8$ is more than $30 + 9$ ✓

e) Thirty-one is less than 3 tens

2 Write the missing phrase.

greater than

less than

equal to

a) 22 is less than 29

b) 41 is greater than 4 tens

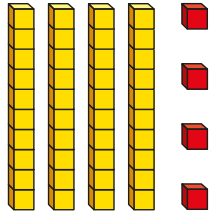

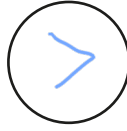
c) Forty-six is greater than $40 + 3$

d) $40 + 8$ is equal to one more than 47



3 Write $<$, $>$ or $=$ in each circle.

24



3 tens and 14 ones

4 Complete the table.

Write or draw your answers. *Various answers.*



	is more than	
	=	
	>	
	is less than	
	is equal to	